










Super Subtractors



Monday	<ol style="list-style-type: none"> Count to 100 in 10s and back again. Complete the sequence 90, 80, 70, <input type="text"/>, <input type="text"/>, <input type="text"/>, <input type="text"/> Double 4 is? So double 40 is? So double 400 is? $9 \times 10 =$ Fill in the numbers before and after if you are counting in 10s. 
Tuesday	<ol style="list-style-type: none"> Count in 5s to 50 and back again. Complete the sequence 30, 28, <input type="text"/>, <input type="text"/>, <input type="text"/>, <input type="text"/> Half of 6 is? So half of 60 is? So half of 600 is? $20 - 4 =$ $6 \times 2 =$
Wednesday	<ol style="list-style-type: none"> $12 + \square = 20$ What is 20 more than 54? $38 + 30 =$ Place these numbers in order largest to smallest 43, 34, 72, 27 Read these numbers. Which one is the largest? Smallest? 
Thursday	<ol style="list-style-type: none"> What is 4 more/less than 40? Complete the sequence 75, 70, <input type="text"/>, <input type="text"/>, <input type="text"/>, <input type="text"/> Mrs Cameron, Mrs Dorricott and Mrs Lennen have 5 pens each. How many pens in total? $90 - \square = 80$ $7 \times 5 =$
Friday	<ol style="list-style-type: none"> There are 18 children in P3L. 7 are girls. How many are boys? Continue the pattern 67, 57, 47, Double 100 is? Half of 100 is? $5 \times \square = 20$ Fill in the numbers before and after if you are counting in 5s. 

Awesome Adders	
Monday	1. What is 1 more/less than 50? 2. Count forwards to 100 in 10s. Can you go backwards too? 3. Complete the pattern: 20, 30, 40, 4. $59 + 3 =$ 5. $2 + \square = 10$
Tuesday	1. What is 2 more/less than 29? 2. Double 6 is ? Half of 14 is ? 3. $\square + 6 = 10$ 4. Complete the sequence 34, 33, 32, \square , \square , \square , \square 5. Fill in the numbers before and after. 
Wednesday	1. What is 3 more/less than 22? 2. $\square + 9 = 10$ 3. $12 - 3 =$ 4. Write all the numbers between 53 and 63. 5. Read these numbers. Which one is the largest? 
Thursday	1. What is 4 more/less than 30? 2. $7 + \square = 10$ 3. Double 2 is ? Half of 10 is ? 4. Complete the sequence: 66, 67, 68, \square , \square , \square , \square 5. $30 - 1 =$
Friday	1. $10 - \square = 6$ 2. $19 - 2 =$ 3. Write the fact family for 6, 4 and 10 using + - and = 4. Complete the sequence 90, 80, 70, \square , \square , \square , \square 5. Read the numbers. Which is biggest? Which is smallest? 

Marvellous Multipliers

Monday	1. Count backwards in 4s from 40 to 0. 2. Complete the sequence 125, 225, 325, □, □, □, □ 3. Partition the numbers: 753, 460, 508 eg $753 = 700+50+3$ 4. $74 + 30 =$ 5. Fill in the numbers before and after if you are counting backwards in 4s. 
Tuesday	1. What is 20 more/less than 44? 2. Complete the sequence 250, 500, □, □, □, 3. Share 36 sweets between 4 children. How many sweets does each child get? 4. $265 - 30 =$ 5. Write the fact family for the numbers 4, 10 and 40 using \times , \div and $=$
Wednesday	1. What is 20 more/less than 94? 2. Find the total of 61p plus 30p. 3. $48 + \square = 88$ 4. I think of a number. I times it by 5 and I get 35. What is my number? 5. Read these 4 digit numbers. Which one is the largest/smallest? 
Thursday	1. What is 300 more/less than 450? 2. Complete the sequence 200, 250, □, □, □, □ 3. Bob saves £3 each week. How much does he save after 6 weeks? 4. $57 - \square = 48$ 5. $\square \times 4 = 48$
Friday	1. Draw a shape with 3 sides/4 sides/ 5 sides/ 6 sides 2. $\Delta \times \bigcirc = 36$. What could the missing numbers be? 3. Mrs Cameron spends £1.46 at the shop. She uses a £2 coin. How much change does she get? 4. Write the fact family for the numbers 12,4 and 48 eg $12 \times 4 = 48$ 5. Fill in the numbers before and after if you are counting in 500s. 

Marvellous Multipliers plus

Monday	<ol style="list-style-type: none"> Count forwards and backwards in 12s to 120. Complete the sequence 0.7, 0.6, 0.5, \square, \square, \square, \square What is a quarter of 36? How many ways can you make 50 by adding 3 even numbers? Fill in the numbers before and after if you are counting in 120s. 
Tuesday	<ol style="list-style-type: none"> $\Delta \times \bigcirc = 48$. What could the missing numbers be? Complete the sequence 720, 600, 480, \square, \square, \square, \square Sam saves £4 each weeks. How much does he save after 11 weeks? Jim has 48 toy cars. He gives $\frac{1}{4}$ of them to his friend. How many does he have left? How many ways can you make 46 using only odd numbers?
Wednesday	<ol style="list-style-type: none"> $56 \div \square = 8$ Mrs Lennen spent £3.27 at the shop. She uses a £10 note. How much change does she get? $8 \times \square = 320$ The time is 09.50am. What time is it 40 minutes later? Read the 5 digit numbers 
Thursday	<ol style="list-style-type: none"> Mrs Boyne goes to the supermarket at 10.15am. She gets home at 11.30am. How long was she at the supermarket for? Complete the sequence 560, 480, \square, \square, \square, \square What is $\frac{1}{4}$ of 80? What is the total of 256g and 312g? $586 - \square = 472$
Friday	<ol style="list-style-type: none"> I think of a number. I double it and add 5. The answer is 25. What was my number? $460 - 137 =$ What is the biggest multiple of 4 without going past 50? Write the fact families for the numbers 12, 11 and 132 using \times and \div and $=$ Fill in the numbers before and after if you are counting in 0.1s. 